


Name \_\_\_\_\_


Find the answers to these addition problems.



$$\begin{array}{r} 5 \\ 3 \\ 3 \\ +4 \\ \hline \end{array}$$

$$\begin{array}{r} 2 \\ 7 \\ 1 \\ +4 \\ \hline \end{array}$$

$$\begin{array}{r} 4 \\ 2 \\ 6 \\ +2 \\ \hline \end{array}$$



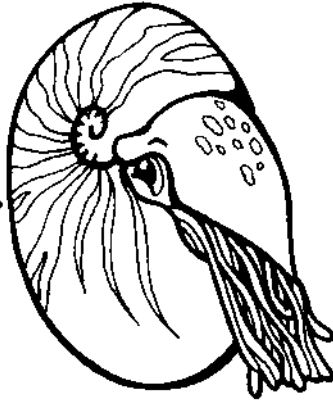

$$\begin{array}{r} 5 \\ 6 \\ 2 \\ +3 \\ \hline \end{array}$$

$$\begin{array}{r} 6 \\ 1 \\ 0 \\ +3 \\ \hline \end{array}$$

$$\begin{array}{r} 7 \\ 0 \\ 3 \\ +4 \\ \hline \end{array}$$

Name \_\_\_\_\_

Subtract the problems.



$$\begin{array}{r} 846 \\ -231 \\ \hline \end{array}$$

$$\begin{array}{r} 780 \\ -419 \\ \hline \end{array}$$

$$\begin{array}{r} 530 \\ -371 \\ \hline \end{array}$$

$$\begin{array}{r} 673 \\ -443 \\ \hline \end{array}$$

$$\begin{array}{r} 734 \\ -185 \\ \hline \end{array}$$

$$\begin{array}{r} 417 \\ -330 \\ \hline \end{array}$$

$$\begin{array}{r} 379 \\ -207 \\ \hline \end{array}$$

$$\begin{array}{r} 237 \\ -27 \\ \hline \end{array}$$



Name \_\_\_\_\_

Find the answers to these multiplication problems.


$$\begin{array}{r} 2 \\ \times 6 \\ \hline \end{array}$$

$$\begin{array}{r} 3 \\ \times 7 \\ \hline \end{array}$$

$$\begin{array}{r} 5 \\ \times 8 \\ \hline \end{array}$$

$$\begin{array}{r} 1 \\ \times 4 \\ \hline \end{array}$$

$$\begin{array}{r} 2 \\ \times 8 \\ \hline \end{array}$$




$$\begin{array}{r} 7 \\ \times 1 \\ \hline \end{array}$$

$$\begin{array}{r} 1 \\ \times 6 \\ \hline \end{array}$$

$$\begin{array}{r} 3 \\ \times 4 \\ \hline \end{array}$$

$$\begin{array}{r} 1 \\ \times 9 \\ \hline \end{array}$$



$$\begin{array}{r} 7 \\ \times 2 \\ \hline \end{array}$$


$$\begin{array}{r} 5 \\ \times 4 \\ \hline \end{array}$$

$$\begin{array}{r} 2 \\ \times 2 \\ \hline \end{array}$$

$$\begin{array}{r} 4 \\ \times 6 \\ \hline \end{array}$$


$$\begin{array}{r} 3 \\ \times 8 \\ \hline \end{array}$$

$$\begin{array}{r} 2 \\ \times 3 \\ \hline \end{array}$$



Name \_\_\_\_\_

Fill in the multiplication table.



Name \_\_\_\_\_

Find the answers to these division problems.

$6 \div 2 = \underline{\quad}$



$4 \div 1 = \underline{\quad}$

$21 \div 3 = \underline{\quad}$

$15 \div 5 = \underline{\quad}$

$9 \div 3 = \underline{\quad}$

$12 \div 4 = \underline{\quad}$


$14 \div 2 = \underline{\quad}$

$8 \div 4 = \underline{\quad}$

$15 \div 3 = \underline{\quad}$


$8 \div 4 = \underline{\quad}$

$10 \div 2 = \underline{\quad}$



Name \_\_\_\_\_

Multiply.



Name \_\_\_\_\_

Find the answers to the division problems.

$10 \div 5 = \underline{\quad}$

$8 \div 2 = \underline{\quad}$

$6 \div 3 = \underline{\quad}$

$5 \div 1 = \underline{\quad}$

$16 \div 2 = \underline{\quad}$


$9 \div 3 = \underline{\quad}$

$10 \div 2 = \underline{\quad}$

$6 \div 2 = \underline{\quad}$

$12 \div 4 = \underline{\quad}$

$8 \div 4 = \underline{\quad}$



Name \_\_\_\_\_

Circle the number that is closest to the one in the box.

70

70  80

15  20

15  20

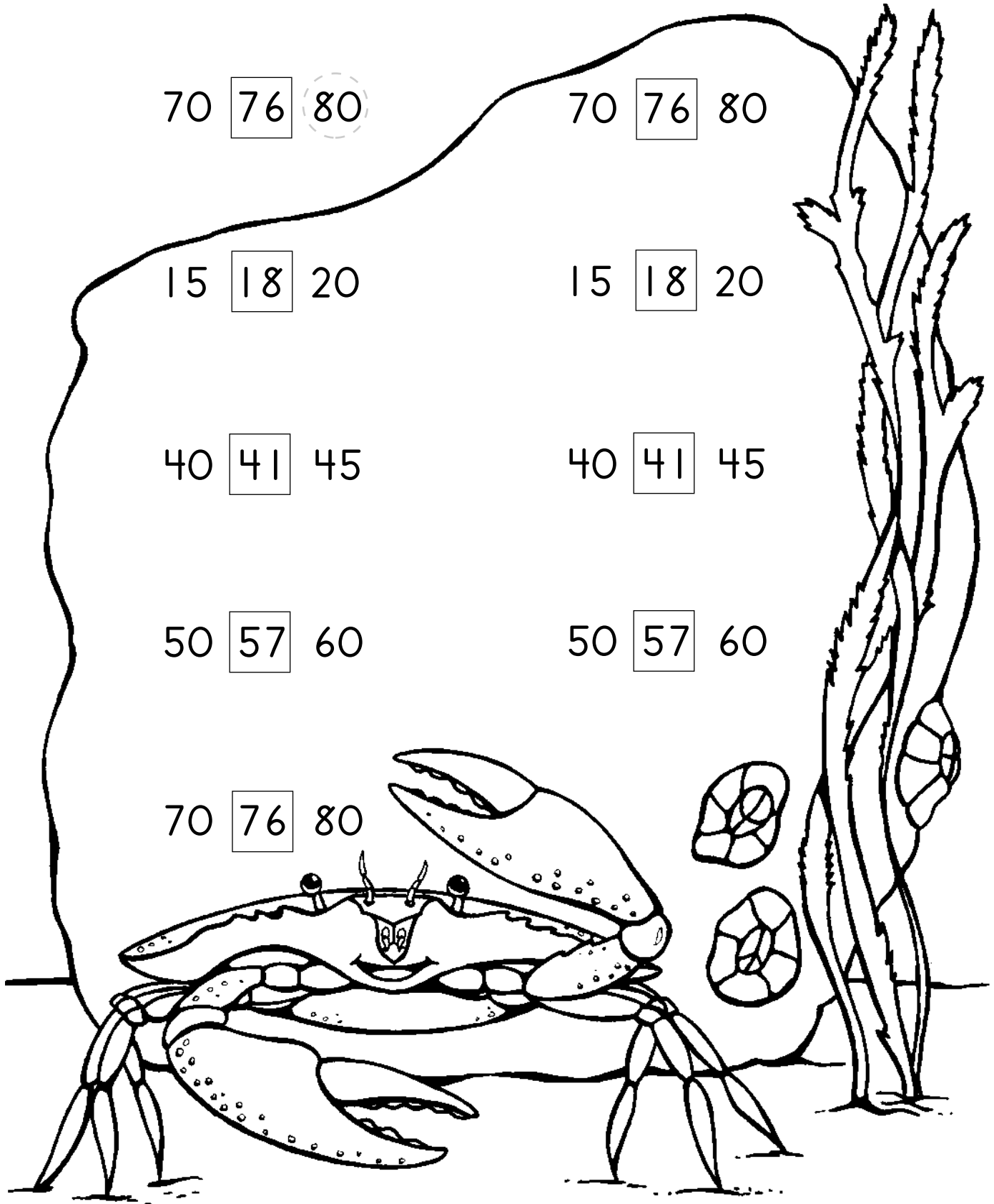
40  45

40  45

50  60

50  60


70  80



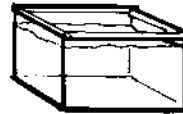


Name \_\_\_\_\_

Add.



$$\begin{array}{r} 1.00 \\ + .50 \\ \hline \end{array}$$



$$\begin{array}{r} \phantom{18.50} \\ + \phantom{.00} \\ \hline \end{array}$$



$$\begin{array}{r} \phantom{.50} \\ \hline \end{array}$$



$$\begin{array}{r} \phantom{.75} \\ \hline \end{array}$$



$$\begin{array}{r} \phantom{5.75} \\ + \phantom{.00} \\ \hline \end{array}$$



$$\begin{array}{r} \phantom{1.00} \\ + \phantom{.00} \\ \hline \end{array}$$




$$\begin{array}{r} \phantom{.75} \\ + \phantom{.00} \\ \hline \end{array}$$



$$\begin{array}{r} \phantom{18.50} \\ + \phantom{.00} \\ \hline \end{array}$$

Name \_\_\_\_\_

Fill in the missing numbers to complete the pattern.



Name \_\_\_\_\_

Robert went on an ocean cruise. He saw six kinds of ocean animals. Fill in one box for each animal he saw. Look at the chart and answer the questions.

He saw:

- 2 octopuses                      6 sea horses
- 3 sperm whales                3 swordfish
- 5 dolphins                        1 whale shark

|              |  |  |  |  |  |  |  |
|--------------|--|--|--|--|--|--|--|
| octopuses    |  |  |  |  |  |  |  |
| dolphins     |  |  |  |  |  |  |  |
| swordfish    |  |  |  |  |  |  |  |
| sperm whales |  |  |  |  |  |  |  |
| sea horses   |  |  |  |  |  |  |  |
| whale shark  |  |  |  |  |  |  |  |



1. Which ocean animal did he see the most of? \_\_\_\_\_
2. Which ocean animal did he see the least of? \_\_\_\_\_
3. How many animals did he see in all? \_\_\_\_\_
4. How many more seahorses did he see than dolphins? \_\_\_\_\_
5. How many ocean animals did he see that start with S? \_\_\_\_\_


Bonus question: Was Robert's cruise in a warm ocean or a cold ocean? \_\_\_\_\_

Name \_\_\_\_\_

Rebecca and Stephanie went scuba diving. Rebecca dove down 20 feet. Stephanie dove down 10 feet deeper than Rebecca.




1. How many feet down was Stephanie? \_\_\_\_\_
2. Rebecca saw a school of 28 fish. When the fish saw her, 12 of them swam away. How many fish were left? \_\_\_\_\_
3. There were 10 fish by Stephanie. The 12 fish that swam away from Rebecca joined the fish by Stephanie. How many fish were now by Stephanie?  
\_\_\_\_\_
4. Now, how many more fish are by Stephanie than there are by Rebecca? \_\_\_\_\_
5. If the fish by both Rebecca and Stephanie joined together, how many fish would there be? \_\_\_\_\_
6. If half of all of the fish swam away, how many would be left? \_\_\_\_\_





Name \_\_\_\_\_

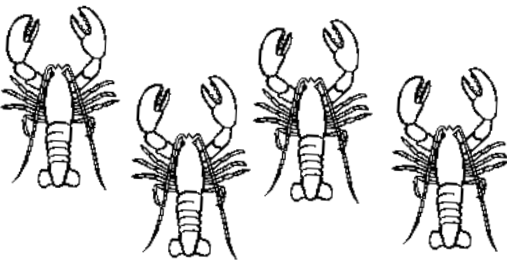
Look at the ocean animals on this page.  
Use multiplication to find the totals.


1.  \_\_\_\_\_ x \_\_\_\_\_ = \_\_\_\_\_  
sea stars arms total number of arms

2.  \_\_\_\_\_ x \_\_\_\_\_ = \_\_\_\_\_  
octopuses arms total number of arms

3.  \_\_\_\_\_ x \_\_\_\_\_ = \_\_\_\_\_  
fish eyes total number of eyes

4.  \_\_\_\_\_ x \_\_\_\_\_ = \_\_\_\_\_  
sea lions noses total number of noses

5.  \_\_\_\_\_ x \_\_\_\_\_ = \_\_\_\_\_  
lobsters legs total number of legs

6.  \_\_\_\_\_ x \_\_\_\_\_ = \_\_\_\_\_  
walruses flippers total number of flippers

7.  \_\_\_\_\_ x \_\_\_\_\_ = \_\_\_\_\_  
manatees flippers total number of flippers

Name \_\_\_\_\_

Add the numbers.

$$\begin{array}{r} 285 \\ +100 \\ \hline \end{array}$$

$$\begin{array}{r} 113 \\ +526 \\ \hline \end{array}$$

$$\begin{array}{r} 261 \\ +126 \\ \hline \end{array}$$

$$\begin{array}{r} 444 \\ +235 \\ \hline \end{array}$$

$$\begin{array}{r} 625 \\ +372 \\ \hline \end{array}$$

$$\begin{array}{r} 158 \\ +421 \\ \hline \end{array}$$

$$\begin{array}{r} 305 \\ +250 \\ \hline \end{array}$$

$$\begin{array}{r} 812 \\ +183 \\ \hline \end{array}$$

$$\begin{array}{r} 285 \\ +357 \\ \hline \end{array}$$

$$\begin{array}{r} 145 \\ +554 \\ \hline \end{array}$$

$$\begin{array}{r} 586 \\ +246 \\ \hline \end{array}$$

$$\begin{array}{r} 852 \\ +122 \\ \hline \end{array}$$

$$\begin{array}{r} 186 \\ +653 \\ \hline \end{array}$$

$$\begin{array}{r} 359 \\ +281 \\ \hline \end{array}$$

$$\begin{array}{r} 286 \\ +336 \\ \hline \end{array}$$

$$\begin{array}{r} 743 \\ +119 \\ \hline \end{array}$$

$$\begin{array}{r} 951 \\ +252 \\ \hline \end{array}$$

$$\begin{array}{r} 642 \\ +622 \\ \hline \end{array}$$

$$\begin{array}{r} 354 \\ +434 \\ \hline \end{array}$$

$$\begin{array}{r} 226 \\ +515 \\ \hline \end{array}$$

$$\begin{array}{r} 253 \\ +475 \\ \hline \end{array}$$


$$\begin{array}{r} 152 \\ +586 \\ \hline \end{array}$$

$$\begin{array}{r} 695 \\ +222 \\ \hline \end{array}$$

$$\begin{array}{r} 362 \\ +111 \\ \hline \end{array}$$

$$\begin{array}{r} 855 \\ +121 \\ \hline \end{array}$$

$$\begin{array}{r} 241 \\ +758 \\ \hline \end{array}$$



Name \_\_\_\_\_

Subtract the numbers.

$$\begin{array}{r} 526 \\ - 100 \\ \hline \end{array}$$

$$\begin{array}{r} 285 \\ - 131 \\ \hline \end{array}$$

$$\begin{array}{r} 261 \\ - 126 \\ \hline \end{array}$$

$$\begin{array}{r} 555 \\ - 235 \\ \hline \end{array}$$

$$\begin{array}{r} 685 \\ - 472 \\ \hline \end{array}$$

$$\begin{array}{r} 658 \\ - 421 \\ \hline \end{array}$$

$$\begin{array}{r} 205 \\ - 204 \\ \hline \end{array}$$

$$\begin{array}{r} 312 \\ - 303 \\ \hline \end{array}$$

$$\begin{array}{r} 357 \\ - 326 \\ \hline \end{array}$$

$$\begin{array}{r} 554 \\ - 246 \\ \hline \end{array}$$

$$\begin{array}{r} 500 \\ - 345 \\ \hline \end{array}$$

$$\begin{array}{r} 752 \\ - 142 \\ \hline \end{array}$$

$$\begin{array}{r} 653 \\ - 218 \\ \hline \end{array}$$

$$\begin{array}{r} 359 \\ - 119 \\ \hline \end{array}$$

$$\begin{array}{r} 268 \\ - 129 \\ \hline \end{array}$$

$$\begin{array}{r} 743 \\ - 222 \\ \hline \end{array}$$

$$\begin{array}{r} 951 \\ - 522 \\ \hline \end{array}$$

$$\begin{array}{r} 642 \\ - 195 \\ \hline \end{array}$$

$$\begin{array}{r} 354 \\ - 252 \\ \hline \end{array}$$

$$\begin{array}{r} 515 \\ - 350 \\ \hline \end{array}$$

$$\begin{array}{r} 253 \\ - 175 \\ \hline \end{array}$$


$$\begin{array}{r} 550 \\ - 326 \\ \hline \end{array}$$

$$\begin{array}{r} 600 \\ - 222 \\ \hline \end{array}$$

$$\begin{array}{r} 311 \\ - 150 \\ \hline \end{array}$$

$$\begin{array}{r} 855 \\ - 758 \\ \hline \end{array}$$

$$\begin{array}{r} 941 \\ - 241 \\ \hline \end{array}$$



Name \_\_\_\_\_

Divide the problems.

$5 \overline{)125}$

$2 \overline{)144}$

$2 \overline{)226}$

$7 \overline{)595}$

$3 \overline{)108}$

$6 \overline{)270}$

$8 \overline{)504}$

$3 \overline{)255}$

$8 \overline{)216}$

$6 \overline{)444}$

$4 \overline{)240}$

$6 \overline{)168}$

$6 \overline{)180}$

$6 \overline{)234}$

$4 \overline{)396}$

$9 \overline{)198}$

$8 \overline{)280}$

$11 \overline{)770}$

$4 \overline{)264}$

$3 \overline{)183}$

$8 \overline{)416}$

$5 \overline{)250}$

$3 \overline{)999}$

$5 \overline{)375}$

$2 \overline{)176}$

$7 \overline{)315}$

$7 \overline{)280}$

$9 \overline{)225}$

$6 \overline{)300}$

$7 \overline{)504}$



Name \_\_\_\_\_

Divide the problems.

$5 \overline{)25}$

$2 \overline{)44}$

$2 \overline{)26}$

$7 \overline{)49}$

$3 \overline{)12}$

$6 \overline{)36}$

$4 \overline{)48}$

$3 \overline{)15}$

$8 \overline{)56}$

$6 \overline{)24}$

$4 \overline{)40}$

$6 \overline{)54}$

$6 \overline{)18}$

$6 \overline{)42}$

$4 \overline{)28}$

$9 \overline{)81}$

$8 \overline{)32}$

$11 \overline{)77}$

$4 \overline{)36}$

$3 \overline{)18}$

$8 \overline{)72}$

$5 \overline{)45}$

$3 \overline{)99}$

$5 \overline{)25}$

$2 \overline{)18}$

$7 \overline{)63}$

$7 \overline{)21}$

$9 \overline{)63}$

$6 \overline{)30}$

$7 \overline{)42}$

Name \_\_\_\_\_

Subtract the problems.

$$\begin{array}{r} 452 \\ - 222 \\ \hline \end{array}$$

$$\begin{array}{r} 999 \\ - 111 \\ \hline \end{array}$$

$$\begin{array}{r} 752 \\ - 468 \\ \hline \end{array}$$

$$\begin{array}{r} 653 \\ - 425 \\ \hline \end{array}$$

$$\begin{array}{r} 887 \\ - 526 \\ \hline \end{array}$$

$$\begin{array}{r} 352 \\ - 68 \\ \hline \end{array}$$

$$\begin{array}{r} 328 \\ - 319 \\ \hline \end{array}$$

$$\begin{array}{r} 443 \\ - 233 \\ \hline \end{array}$$

$$\begin{array}{r} 884 \\ - 629 \\ \hline \end{array}$$

$$\begin{array}{r} 369 \\ - 225 \\ \hline \end{array}$$

$$\begin{array}{r} 963 \\ - 852 \\ \hline \end{array}$$

$$\begin{array}{r} 389 \\ - 278 \\ \hline \end{array}$$

$$\begin{array}{r} 843 \\ - 122 \\ \hline \end{array}$$

$$\begin{array}{r} 985 \\ - 655 \\ \hline \end{array}$$

$$\begin{array}{r} 739 \\ - 458 \\ \hline \end{array}$$

$$\begin{array}{r} 493 \\ - 182 \\ \hline \end{array}$$

$$\begin{array}{r} 552 \\ - 294 \\ \hline \end{array}$$

$$\begin{array}{r} 375 \\ - 125 \\ \hline \end{array}$$

$$\begin{array}{r} 754 \\ - 232 \\ \hline \end{array}$$

$$\begin{array}{r} 943 \\ 345 \\ \hline \end{array}$$

$$\begin{array}{r} 154 \\ - 79 \\ \hline \end{array}$$

$$\begin{array}{r} 827 \\ - 331 \\ \hline \end{array}$$

$$\begin{array}{r} 951 \\ - 357 \\ \hline \end{array}$$

$$\begin{array}{r} 364 \\ - 282 \\ \hline \end{array}$$

$$\begin{array}{r} 498 \\ - 315 \\ \hline \end{array}$$

$$\begin{array}{r} 564 \\ - 36 \\ \hline \end{array}$$

$$\begin{array}{r} 157 \\ - 58 \\ \hline \end{array}$$

$$\begin{array}{r} 582 \\ - 258 \\ \hline \end{array}$$

$$\begin{array}{r} 551 \\ - 356 \\ \hline \end{array}$$

$$\begin{array}{r} 476 \\ - 238 \\ \hline \end{array}$$

Name \_\_\_\_\_

Multiply the problems.

$$\begin{array}{r} 1 \\ \times 2 \\ \hline \end{array}$$

$$\begin{array}{r} 7 \\ \times 8 \\ \hline \end{array}$$

$$\begin{array}{r} 3 \\ \times 9 \\ \hline \end{array}$$

$$\begin{array}{r} 3 \\ \times 2 \\ \hline \end{array}$$

$$\begin{array}{r} 9 \\ \times 5 \\ \hline \end{array}$$

$$\begin{array}{r} 5 \\ \times 5 \\ \hline \end{array}$$

$$\begin{array}{r} 9 \\ \times 4 \\ \hline \end{array}$$

$$\begin{array}{r} 7 \\ \times 7 \\ \hline \end{array}$$

$$\begin{array}{r} 2 \\ \times 5 \\ \hline \end{array}$$

$$\begin{array}{r} 3 \\ \times 4 \\ \hline \end{array}$$

$$\begin{array}{r} 1 \\ \times 9 \\ \hline \end{array}$$

$$\begin{array}{r} 5 \\ \times 4 \\ \hline \end{array}$$

$$\begin{array}{r} 9 \\ \times 8 \\ \hline \end{array}$$

$$\begin{array}{r} 3 \\ \times 4 \\ \hline \end{array}$$

$$\begin{array}{r} 11 \\ \times 6 \\ \hline \end{array}$$

$$\begin{array}{r} 4 \\ \times 4 \\ \hline \end{array}$$

$$\begin{array}{r} 4 \\ \times 3 \\ \hline \end{array}$$

$$\begin{array}{r} 10 \\ \times 8 \\ \hline \end{array}$$

$$\begin{array}{r} 4 \\ \times 6 \\ \hline \end{array}$$

$$\begin{array}{r} 9 \\ \times 9 \\ \hline \end{array}$$

$$\begin{array}{r} 6 \\ \times 8 \\ \hline \end{array}$$

$$\begin{array}{r} 8 \\ \times 8 \\ \hline \end{array}$$

$$\begin{array}{r} 10 \\ \times 5 \\ \hline \end{array}$$

$$\begin{array}{r} 8 \\ \times 9 \\ \hline \end{array}$$

$$\begin{array}{r} 7 \\ \times 8 \\ \hline \end{array}$$

$$\begin{array}{r} 7 \\ \times 6 \\ \hline \end{array}$$

$$\begin{array}{r} 2 \\ \times 7 \\ \hline \end{array}$$

$$\begin{array}{r} 5 \\ \times 6 \\ \hline \end{array}$$




$$\begin{array}{r} 3 \\ \times 8 \\ \hline \end{array}$$

$$\begin{array}{r} 3 \\ \times 3 \\ \hline \end{array}$$

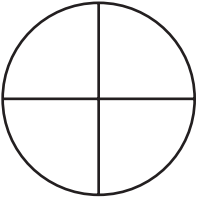
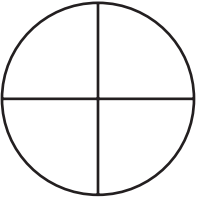
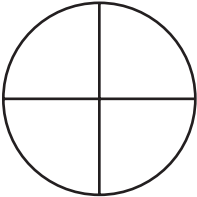
Name \_\_\_\_\_

Color the pieces for each fraction. Solve the problem.

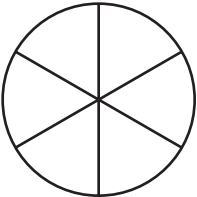
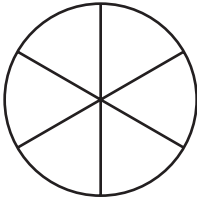
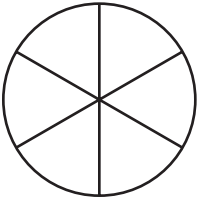
Write your answer in the lowest term.

1.   $\frac{2}{2}$  -   $\frac{1}{2}$  =  \_\_\_\_\_

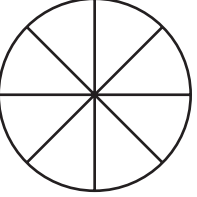
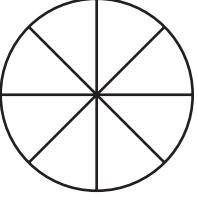
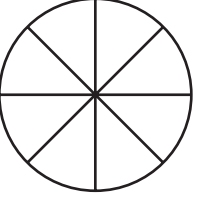
Lowest term \_\_\_\_\_

2.   $\frac{3}{4}$  -   $\frac{1}{4}$  =  \_\_\_\_\_

\_\_\_\_\_

3.   $\frac{5}{6}$  -   $\frac{2}{6}$  =  \_\_\_\_\_

\_\_\_\_\_

4.   $\frac{7}{8}$  -   $\frac{5}{8}$  =  \_\_\_\_\_

\_\_\_\_\_